

Calculating Area

Find the area of the shapes.

1.

6 inches

3 inches



2.

7 inches

2 inches



3.

9 inches

1 inch



4.

4 inches


4 inches



5.

8 cm

2 cm



6.

7 cm


3 cm



7.

9 cm


7 cm



8.

4 miles


2 miles



9.

5 mile


1 mile



10.

7 yards

4 yards

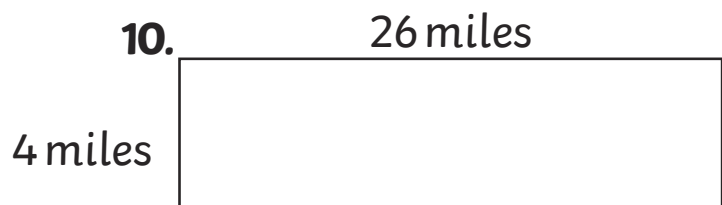
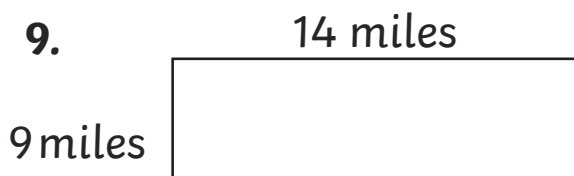
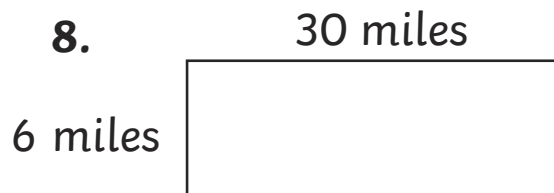
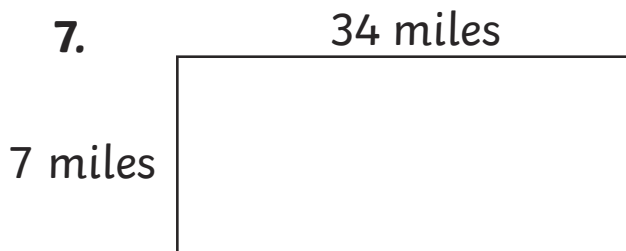
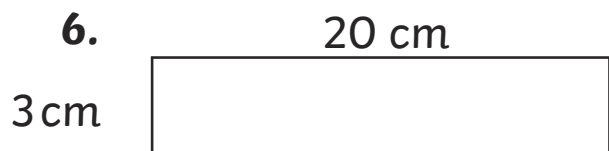
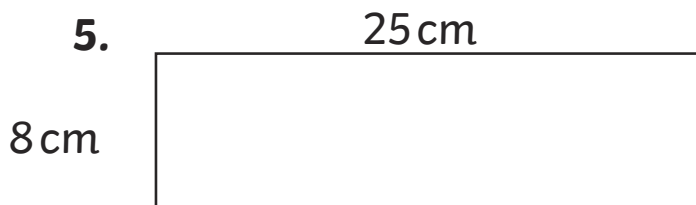
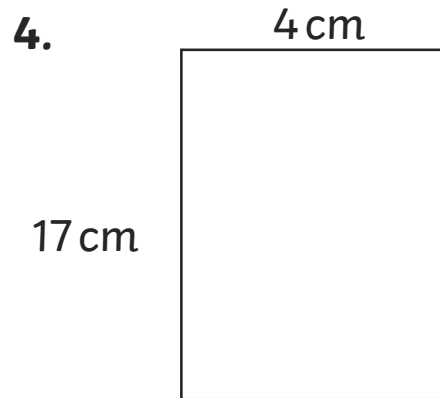
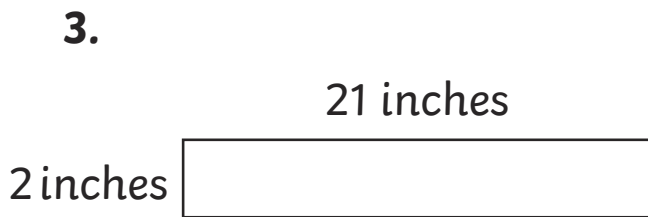
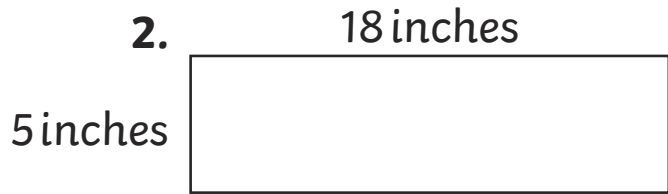
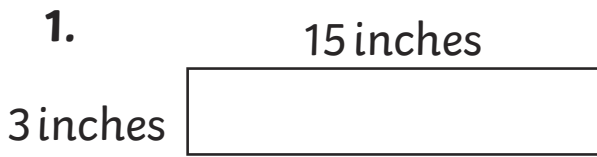


Calculating Area **Answers**

1. **18 sq. inches**
2. **14 sq. inches**
3. **9 sq. inches**
4. **16 sq. inches**
5. **16 cm²**
6. **21 cm²**
7. **63 cm²**
8. **8 sq. miles**
9. **5 sq. miles**
10. **28 sq. yards**

Calculating Area

Find the area of the shapes.



Calculating Area **Answers**

1. **45 sq. inches**
2. **90 sq. inches**
3. **42 sq. inches**
4. **68 cm²**
5. **200 cm²**
6. **60 cm²**
7. **238 sq. miles**
8. **180 sq. miles**
9. **126 sq. miles**
10. **104 sq. yards**

Calculating Area

Find the area of the shapes.

1.

18 cm

12 cm



2.

65 cm


21 cm



3.

71 cm


30 cm



4.

10 cm

33 cm



5.

54 cm

21 cm



6.

63 cm

32 cm



7.

79 cm

12 cm



8.

19 cm


18 cm



9.

17 cm

17 cm



10.

32 cm

29 cm



Calculating Area **Answers**

1. **216 cm²**
2. **1365 cm²**
3. **2130 cm²**
4. **330 cm²**
5. **1134 cm²**
6. **2016 cm²**
7. **948 cm²**
8. **342 cm²**
9. **289 cm²**
10. **928 cm²**